


Partitioning numbers



I Here are some sweets.



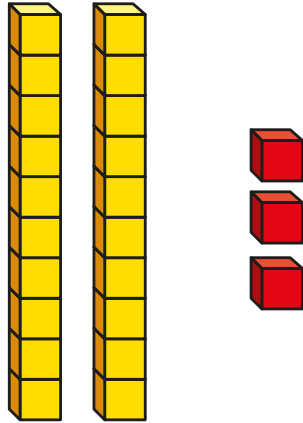
Complete the sentences.

There are bags of 10 sweets.

There are individual sweets.

There are sweets altogether.

2 The base 10 show the number 23



Complete the sentence.

23 has tens and ones.

How do you know?

3 Complete the sentences.

a) 49 has tens and ones.


b) 92 has tens and ones.

c) 60 has tens and ones.





4 Ron is thinking of a number.



My number has 4 ones
and 7 tens.

What number is Ron thinking of?



5 Fill in the missing numbers.

a) is greater than 57

b) is less than 41

c) is greater than 28 but less than 36

d) 65 is greater than

How many tens and ones does each of your numbers have?

